

# Telling and Writing Time to the Half Hour




When it is 7:30, the hour hand will be halfway between

7 and 8.

The minute hand

will be on 6.



The hour hand is shorter than the minute hand.

Complete the sentences.

Then draw the hands on the clock face.


1.



The hour hand will be halfway

between 3 and 4.

The minute hand will be on 6.




2.



The hour hand will be halfway

between \_\_\_\_\_ and \_\_\_\_\_.

The minute hand will be on \_\_\_\_\_.



3.



The hour hand will be halfway

between \_\_\_\_\_ and \_\_\_\_\_.

The minute hand will be on \_\_\_\_\_.

